

CBCS Scheme

USN

--	--	--	--	--	--	--	--	--	--

16/17MDE12

First Semester M.Tech. Degree Examination, June/July 2018 Finite Element Method

Time: 3 hrs.

Max. Marks: 80

Note: Answer FIVE full questions, choosing ONE full question from each module.

Module-1

1. What are the basic steps involved in finite element method to solve mechanical engineering problems and explain briefly with an example. (16 Marks)

OR

2. The potential energy for the linear one dimensional rod as shown in Fig.Q2 with body force neglected is $\pi = \frac{1}{2} \int_0^2 EA \left(\frac{du}{dx} \right)^2 dx - 2u$ where $u_1 = u(x = 1)$. Solve it by Galerkin's approach. (16 Marks)

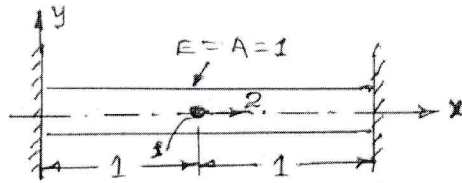


Fig.Q2

Module-2

3. a. What are the properties of stiffness matrix. (03 Marks)
 b. A stepped bar as shown in Fig.Q3(b). Using Penalty approach for handling boundary conditions. Determine :
 i) Nodal displacements ii) Stress in each material iii) Reaction forces. (13 Marks)

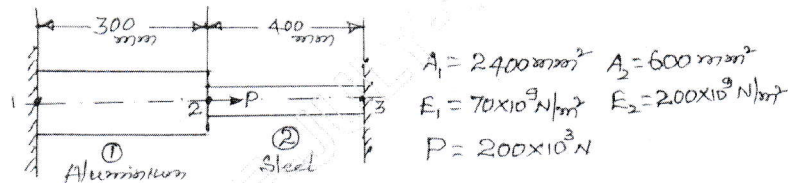


Fig.Q3(b)

OR

4. Derive a stiffness matrix for a beam element by using shape function. (16 Marks)

Module-3

5. What are shape function and derive the element stiffness matrix for a four noded quadrilateral membrane element (QUAD4). (16 Marks)

OR

6. a. Write a note on hexahedral elements and explain its properties. (08 Marks)
 b. What is serendipity finite element method and explain its geometric composition. (08 Marks)

Important Note : 1. On completing your answers, compulsorily draw diagonal cross lines on the remaining blank pages.
 2. Any revealing of identification, appeal to evaluator and /or equations written eg. 42+8 = 50, will be treated as malpractice.

Module-4

- 7 Obtain the equations of equilibrium of plate theory for an isotropic material subjected to twisting moment per unit length. (16 Marks)

OR

- 8 Name the properties and degrees of freedom for the following elements :
i) Flat element ii) Curved element iii) Cylindrical element iv) Conical shell element. (16 Marks)

Module-5

- 9 For the pin jointed truss element shown in Fig.Q9 prove that fundamental frequency is given by $W = \frac{0.648}{L} \sqrt{E/\rho}$. (16 Marks)




Fig.Q9

OR

- 10 Find the eigen value and eigen vectors for the beam shown in Fig.Q10 and find buckling load. (16 Marks)

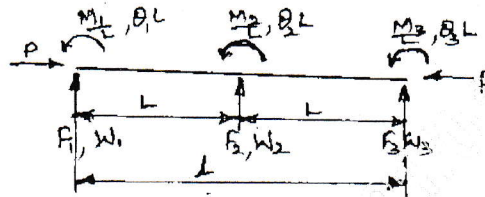


Fig.Q10
